

Geography “B”

Instructions

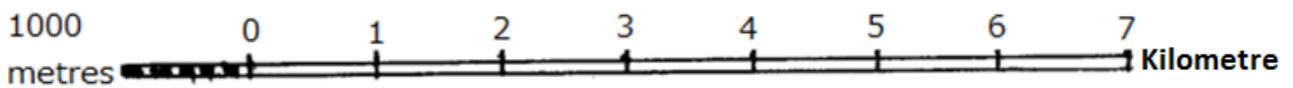
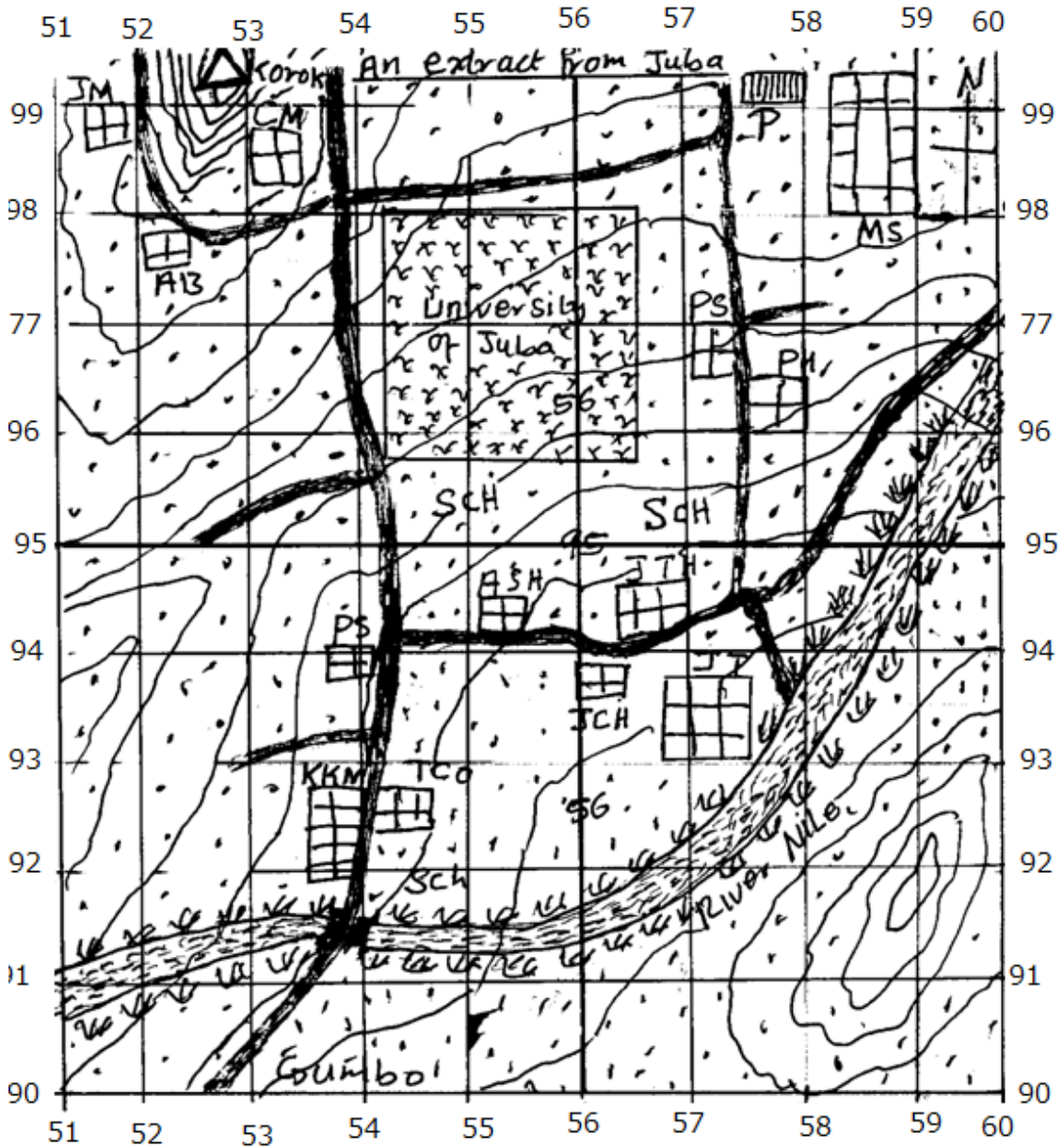
1. This paper consists of sections A, B, C and D.
2. Section B has parts I,II and III.All questions in their parts are compulsory.
3. Section B has 4 questions (Sudan/Africa).You are required to answer question number 1 (compulsory) and any other two questions from this section.
4. Section C has 3 questions (North America).You are required to answer any two questions from this section.
5. Section D has 2 questions (Rhineland).You are required to answer any one question from this section.
6. Answers to questions attempted should be written on the spaces provided.

FOR EXAMINER’S USE ONLY

Section	Part/question	Marks	Marked by	Checked by
A	Part I			
	Part II			
	Part III			
B				
C				
D				
Total				

**SECTION A: COMPULSORY
PART 1 MAP READING (10 marks).**

1. Study the map extract of the part of Juba city below and answer the questions that follow.



Key

- | | |
|-----------------------------|------------------------|
| -University of Juba | -Juba complex hospital |
| -Parliament | -Al-Saba hospital |
| -JUba bridge | -Juba town |
| Sch -School | -Presidential house |
| KKM -Konyokonyo market | - Ministries |
| TCO -Town C | -Parliament |
| PS - Police Station | - Army barrack |
| JTH -Juba Teaching Hospital | - Jebel Market |
| -Mt.Korok | - Custom market |
| Tarmac road | |

a. State the grid reference of the following features.

- (i) Juba Teaching hospital. _____ (1 mark)
- (ii) Juba bridge. _____ (1 mark)

b. Name the features found at the grid reference


- (i) 535958 _____ (1 mark)
- (ii) 528995 _____ (1 mark)

c. Calculate the area of the land occupied by the University of Juba (3 marks)

(d) Measure and state in kilometers the distance of the tarmac road between the grid reference 527900 and 542950 (3 marks)

PART II: PHOTOGRAPHIC INTERPRETATION (10 marks).

2. Study the photograph below and answer the questions that follow



a. State the economic activity taking place in the photograph _____(2 marks)

b. Outline the causes of the economic activity shown on the photography. (4 marks)

(i) _____

(ii) _____

(iii) _____

(iv) _____

c. State two problems created by the economic activity taking place in the photography above.(2 marks).

(i) _____

(ii) _____

d. How can you solve the problems created by the economic activity taking place on the photography.(2 marks)

PART III: OBJECTIVES (20 MARKS)

Circle the letter of the correct answer in each question.

Q.1.In South Sudan, Equatorial climate is mainly experienced in

- a) Jonglei state
- b) Unity State.
- c) Western Equatoria State.
- d) Northern Bahr El Ghazal State.

Q.2.Which of the following is the major problem facing mining in South Sudan?

- a) Lack of capital.
- b) Insecurity.
- c) Land lockedness.
- d) Competition from other countries.

Q.3.Fishing in South Sudan can best be improved by;-

- a) Injecting more capital into the fishing industries.
- b) Employing more labour.
- c) Using modern methods of fishing.
- d) Exporting fish abroad.

Q.4.The most serious problems limiting agricultural development in South Sudan is :

- a) Poor land tenure system.
- b) Lack of capital.
- c) Loss of soil fertility.
- d) Unfavourable government policy.

Q.5.Which of the following is the main reason for conserving wild life in South Sudan?

- a) Tourist attraction.
- b) Regulate climate.
- c) Sustain bio-diversity.
- d) Provide medicine.

Q.6.The proposed port for exporting South Sudan oil is

- a) Port Mombasa.
- b) Port Mogadishu.
- c) Port Bell.
- d) Port Lamu.

Q.7.Which of the following can be the best way of controlling rural-urban migration in South Sudan?

- a) Giving land to the rural landless.
- b) Extending similar urban services to the rural areas.
- c) Putting up laws preventing movement of people from rural to urban areas.
- d) Putting up settlement schemes in rural areas.

Q.8.Why is the government of South Sudan seriously against deforestation

1. Because trees take long to grow once cut down.
 2. Trees are sources of medicines.
 3. Trees are used as fuel.
 4. Because of fear of wiping out forests and accelerating soil erosion.
- a) 1 and 2.
 - b) 2 and 3.
 - c) 1, 3 and 4.
 - d) 2 and 4

Q.9The best means of transporting fresh fish from Bor to Juba is

- a) By water.
- b) By road.
- c) By railway.
- d) By air.

Q.10. The type of soil erosion which involves uniform removal of soil from a large area is called

- a) Rill erosion.
- b) Sheet erosion.
- c) Splash erosion.
- d) Gully erosion.

Q.11. Which of the following is an example of igneous rocks?

- a) Granite.
- b) Sand stone.
- c) Shale.
- d) Limestone.

Q.12. Which of the following lines are used for the allocation of time?

- a) Equator.
- b) Tropic of cancer.
- c) Longitude.
- d) Latitudes.

Q.13. The major cash crop grown in Gezira Irrigation scheme is

- a) Dura.
- b) Cotton.
- c) Rice.
- d) Sugar cane.

Q.14. Which of the following processes is responsible for the formation of Great African Rift Valley?

- a) Volcanicity.
- b) Earth quake.
- c) Faulting.
- d) Folding.

Q.15. Which of the following tree species is indigenous in South Sudan.

- a) Teak.
- b) Neem.
- c) Mahogany.
- d) Eucalyptus.

Q.16. Most people settle in the highland because

- a) Of the volcanic soils.
- b) Highlands are far from the coast.
- c) Highlands get heavy and reliable rainfall.
- d) Of good view they possess.

Q.17. The mineral product that has caused misunderstanding and political instability in the Sudan is

- a) Gold.
- b) Iron.
- c) Oil.
- d) Copper.

Q.18. Which of the following is a renewable source?

- a) Oil.
- b) Iron.
- c) Vegetation.
- d) Charcoal.

Q.19. One of the ways through which man interact positively with environment is by-----

- a) Deforestation.
- b) Bush burning.
- c) Pollution.
- d) Afforestation.

Q.20. The line of the latitude drawn on a map marked at $23\frac{1}{2}^{\circ}$ south is known as:-

- a) Equator.
- b) Tropic of cancer.
- c) Tropic of Capricorn.
- d) Prime meridian.

SECTION B: SUDAN/AFRICA (30 MARKS)

Answer question 1 and any other two questions from this section:


Q.1.(a) Define the term pastoralism (1 mark).


(b) What are the factors favouring pastoralism in South Sudan? (5 marks).


(c) How can the practice of pastoralism be improved in South Sudan? (5 marks).

Q.2.(a) Draw a sketch map of Africa showing the Great East African rift valley and on it mark and name: (6 marks).

(i) Lakes: Albert, Edward, Tanganyika, Malawi and Turkana.







SECTION C: NORTH AMERICA (20 MARKS)

Answer any two questions from this section

- Q.5.(a) Give reasons why the Tennessee valley Authority was established ?(5 marks)
- (b) How has the Tennessee valley Authority benefited the people of the area? (5 marks)


- Q.6.(a) Name any two fishing ports found in British Columbia? (2 marks)
- (b) Identify the most dominant methods of fishing in British Columbia? (2 marks)
- (c) Describe the conditions which have favoured fishing in British Columbia? (6 marks)

Q.7. The table below shows wheat production per provinces in Canada. Study it and answer the questions that follow.

Provinces	Percentages of wheat production
Alberta	23%
Manitoba	17%
Saskatchewan	55%
Others	2%
Total	100%

Sources: Comprehensive geography student's book form 3 page 230

- (a) Draw a pie chart to show percentage of wheat production in the Canadian provinces. (6 marks)
- (b) Explain the factors favouring the development of wheat production in the Canadian Prairies . (4 marks)



A series of horizontal lines for writing, consisting of 30 evenly spaced lines across the page.

A series of 30 horizontal lines for writing.

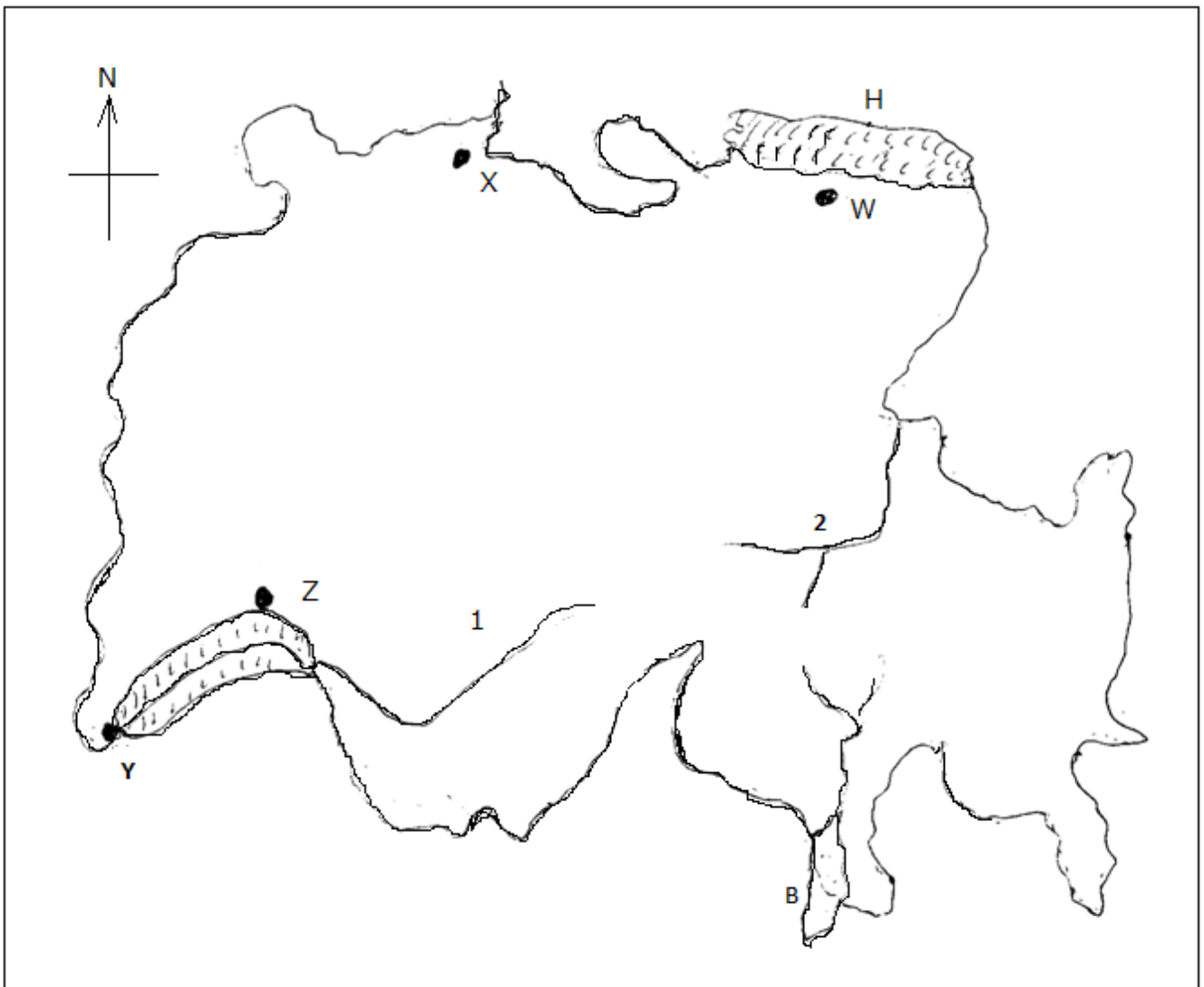
SECTION D: RHINELAND (10 MARKS)

Answer any one question from this section

Q.8. (a) Describe the conditions which have favoured agricultural practices in the Rhine rift valley in Germany (5 marks)

(b) State the importance of crop's growing in the Rhine rift valley to the economy of Germany. (5 marks)

Q.9. Study the map of Switzerland and answer the following questions



(a) Name the

(i) Industrial towns marked **W**, **X**, **Y** and **Z** (2 marks)

(ii) Rivers marked 1 and 2 (1 marks)

(iii) Lakes marked **A** and **B** (1 marks)

(b) State any two products obtained from the Swiss:

(i) Engineering industries (1 mark)

(ii) Chemical industries (1 mark)

(c) Explain the problems faced by Switzerland in developing her industries. (4 marks)

The End.