

Geography “C”

Instructions

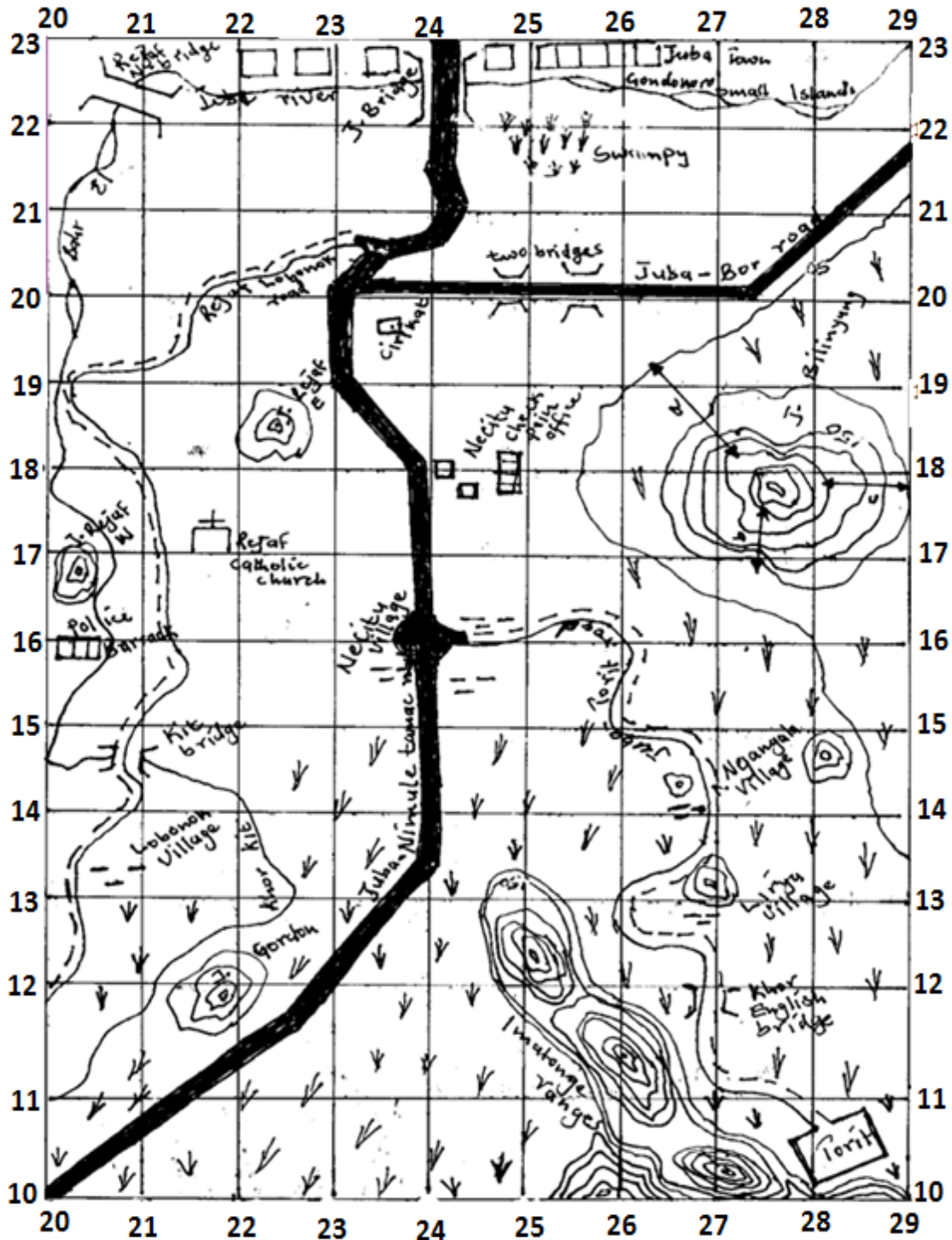
1. This paper consists of sections A,B,C and D.
2. Section B has parts I,II and II.All questions in these parts are compulsory.
3. Section B has 4 questions (Sudan/Africa).You are required to answer question number 1 (compulsory) and any other two questions from this section.
4. Section C has 3 questions (North America).You are required to answer any two questions from this section.
5. Section D has 2 questions (Rhineland).You are required to answer any one question from this section.
6. Answers to questions attempted should be written on the spaces provided.


For examiner’s use only.

Section	Part/question	Marks	Marked by	Checked by
A	Part I			
	Part II			
	Part III			
B				
C				
D				
Total				

SECTION A (COMPULSORY)
PART 1: MAP READING (10 marks)

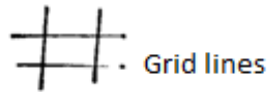
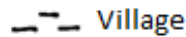

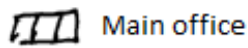

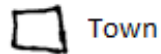
1. Study the sketch map of Juba --Nimule road provided below and answers the questions about it.





Key

Interval meter 50



(a).With the help of the map given above, find the grid references of the following:

- i. Rejaf catholic church _____ (1 mark)
- ii. Nyangala hill _____ (1 mark)

(b). which features are found at the following grid references.

- i. 240160 _____ (1 mark)
- ii. 270118 _____ (1 mark)

(c). Identify two physical and two human features on the map.

Physical: i. _____ ii _____ (2 marks)

Human: i. _____ ii _____ (2 marks)

(d).Find the direction of Jebel Bilinyang from Necitu village;

_____ (1 mark)

(e). Mention any two major economic activities practiced in the area covered by the map.

a _____

b _____ (1 mark)

PART II: PHOTOGRAPHIC INTERPRETATION (10 marks).

1. Study the photograph provided below and answer the questions that follow.



(a). State the economic activity taking place in the photography (1 mark)

(b). Explain the factors which have favoured the economic activity identified in (a) above.(4 marks)

(c). Outline the importance of the economic activity to the people living in the area (3 marks)

(d). Giving reason for your answer, suggest an area in South Sudan where this photograph could have been taken from. (2 marks).

PART III: OBJECTIVES (20 marks)

Circle the letter of the correct answer in each question.

1. The instrument used for measuring temperature in a weather station is :
 - A. Barometer.
 - B. Hydrometer.
 - C. Sixth thermometer.
 - D. Wind vane.

2. The line of latitude marked at $23\frac{1}{2}N^{\circ}$ is known as :
 - A. Tropic of Capricorn.
 - B. Tropic of cancer.
 - C. Equator.
 - D. Green Wich Meridian.

3. North East Trade winds and South East Trade Winds convergence within the Equator hence , it leads to formation of:
 - A. Little rainfall.
 - B. Desert.
 - C. Heavy rainfall.
 - D. Semi desert.

4. Which of the following processes of weathering shows physical weathering processes?
 - A. Hydrolysis.
 - B. Oxidation.
 - C. Reduction.
 - D. Block disintegration.

5. The following statements show soil conservation method except:
 - A. Afforestation.
 - B. Land reclamation.
 - C. Re-afforestation.
 - D. Mass education on soil.

6. The economic development of South Sudan will depend mostly on the:
 - A. Full exploitation of natural resources.
 - B. Rapid population growth.
 - C. Improvement in transport system.
 - D. Exploration of New Market.

7. Cocoa crop is mainly grown in
 - A. Liberia.
 - B. Ghana.
 - C. Uganda.
 - D. South Sudan.

8. Which of the following is the major tourist attraction in Africa?
 - A. Cultural sites.
 - B. Mountain scenery.
 - C. Flora and Fauna.
 - D. Climate.

9. The major factor affecting industrial development in South Sudan is
- A. Lack of hydro electric power.
 - B. Lack of skilled labour.
 - C. Poor transport and communication network.
 - D. Lack of capital.
10. The main reason why Juba is highly populated is because it;
- A. Has a high standard of living.
 - B. Has more employment opportunities.
 - C. Is an administrative centre.
 - D. Is a capital city.
11. The following are some of the water falls on the River Nile, except.
- A. Karuma falls.
 - B. Bujagali falls.
 - C. Ripon falls.
 - D. Fulla falls.
12. The following are not the communication means ,except.
- A. Media and posters.
 - B. Air lines.
 - C. Land network.
 - D. Railway lines.
13. Which of the following is the land form resulting from glaciations?
- A. An inselberg.
 - B. An arête.
 - C. A plug.
 - D. A crater
14. Which of the following best represent stages in the formation of sedimentary rocks?
- A. Erosion, deposition and weathering.
 - B. Weathering, erosion and deposition.
 - C. Erosions, weathering and deposition.
 - D. Weathering, deposition and erosion.

15. The settlement pattern found along transport and communication routes is called:
- A. Dispersed.
 - B. Nucleated.
 - C. Linear.
 - D. Clustered.
16. The common types of fish caught in River Nile is:
- A. Nile Perch and lung fish.
 - B. Cat fish and Nile perch.
 - C. *Tilapia nilotia* and lung fish
 - D. Nile perch and *Tilapia nilotia*
17. The largest river in Africa is :
- A. River Nile.
 - B. River Congo.
 - C. River Niger.
 - D. River Orabnge.
18. Large areas of Equatorial region are mainly used for rearing animals and growing crops due to:
- A. Fertile soil.
 - B. Long dry season.
 - C. Absence of market.
 - D. Presence of pests and diseases.
19. Peasant agricultural production in South Sudan would be greatly improved if:
- A. Other cash crops are introduced.
 - B. Cooperative societies are formed.
 - C. Swamp reclamation is encouraged.
 - D. Mechanisation is extended.
20. Which of the following industries is market oriented?
- A. Brewing, flour ,milling and cement manufacturing.
 - B. Flour, milling cigarettes and cement manufacturing.
 - C. Brewing, cigarettes and cement manufacturing.
 - D. Cigarettes, milling and cement manufacturing.

SECTION B: SUDAN/AFRICA (30 marks)

Answer question (1) and any other two questions from this section.

Q.1.(a) Describe the ways in which man has destroyed the natural environment in South Sudan (5 marks).

(b) How would you improve the natural environment which has been destroyed by man in your village? (5 marks)

Q.2.(a) With the help of a diagram, explain soil catena (5 marks)

(b) What are the causes of soil erosion in Africa? (5 marks)

Q.3.(a) With the help of an illustration, explain the three (3) types of rainfall patterns . (6 marks)

(b) What are the factors influencing the climate of Africa? (4 marks)

Q.4.(a) With reference to one of the multi-purpose project in Egypt, explain the factors which have led to the establishment of the Dam. (5 marks)

(b) Identify the problems resulting from the establishment of the Dam? (5 marks)

Lined writing area consisting of 28 horizontal lines.

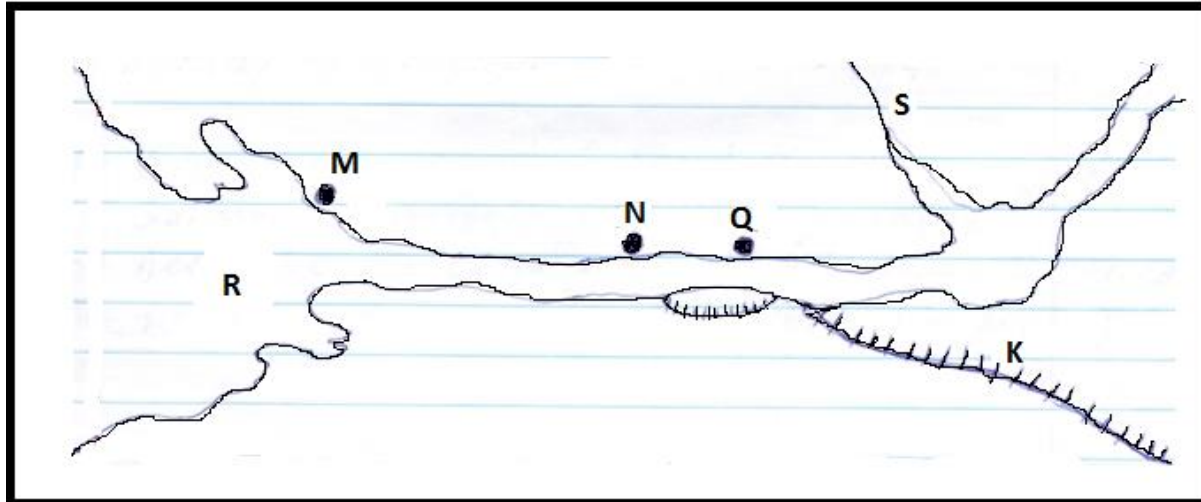
A series of horizontal lines for writing, consisting of 28 evenly spaced lines.

Blank lined writing area with horizontal lines.

SECTION C: NORTH AMERICA (20 marks)

Answer any two questions from this section

Q.5. Study the map below of St. Lawrence Seaway and answer the questions that follow.



(a) Name.

- i. Canal marked K ($\frac{1}{2}$ mark).
- ii. Towns marked M, N and Q ($1\frac{1}{2}$ marks).
- iii. Water body marked R ($\frac{1}{2}$ mark).
- iv. River marked ($\frac{1}{2}$ mark).

(b) Explain why St. Lawrence Sea Way Project was established. (4 marks).

(c) Describe the steps taken in the construction of the sea way. (3 marks)

Q.6.(b) Describe the conditions that have favoured the development of New York as a Port. (4 marks).

(b) Explain the problems facing New York city. (3 marks)

(c) Outline the measures being taken to solve the problems in (b) above (3 marks).

Lined writing area with horizontal lines.

Lined writing area with horizontal lines.

Lined writing area with horizontal ruling lines.

END

